


Ισοδύναμα Κλάσματα


1. Γράφω με κλάσμα τι μέρος κάθε σχήματος είναι χρωματισμένο. Ύστερα βρίσκω τα ισοδύναμα κλάσματα και γράφω τις ισότητες που σχηματίζονται.



—



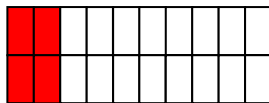
—




—




—




—



—



—



—



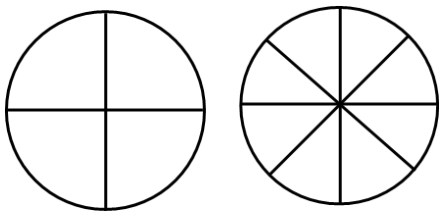
—

α. — = — = —

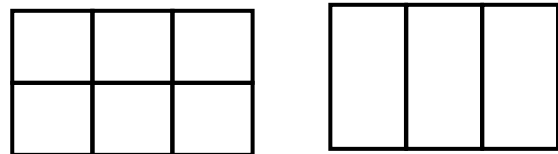
β. — = — = —

γ. — = — = —

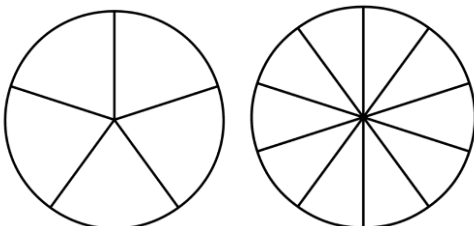
2. Χρωματίζω τα σχήματα ώστε να προκύψουν ισοδύναμα κλάσματα.



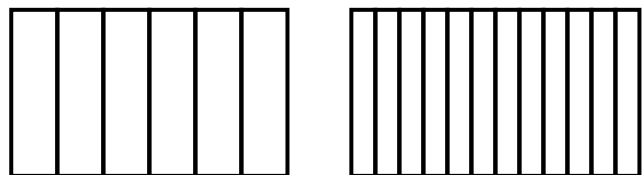
$$\frac{3}{4} = \frac{\quad}{8}$$



$$\frac{4}{6} = \frac{\quad}{3}$$



$$\frac{2}{5} = \frac{\quad}{10}$$



$$\frac{3}{6} = \frac{\quad}{12}$$