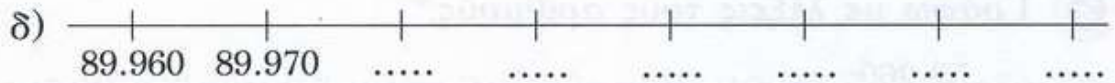
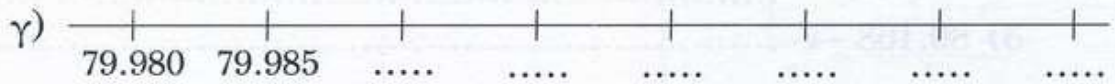
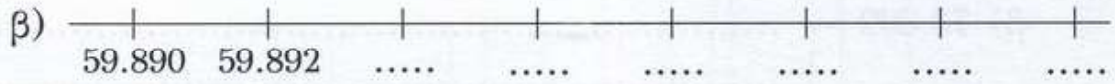
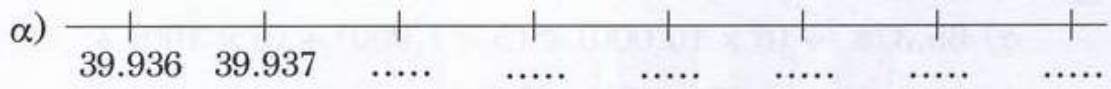
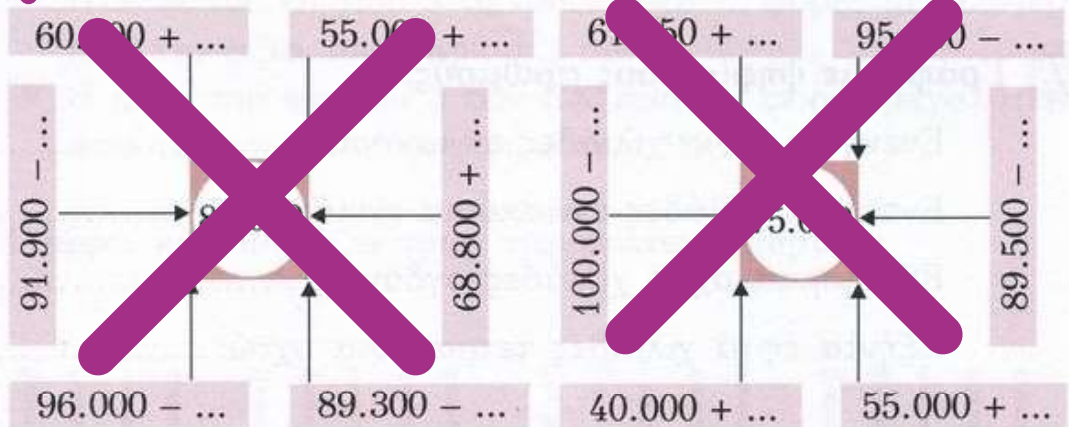


(δεν χρειάζεται να κάνετε αριθμογραμμές, απλά συνεχίζετε!)

9 Συμπληρώνω τα κενά στις παρακάτω αριθμογραμμές:



10 Συμπληρώνω τους αριθμούς που λείπουν:



11 Κάνω τις πράξεις:

- | | |
|--------------------------------|--------------------------------|
| α) $29.999 + 1 = \dots\dots$ | β) $60.000 - 1 = \dots\dots$ |
| $29.999 + 10 = \dots\dots$ | $60.000 - 10 = \dots\dots$ |
| $29.999 + 100 = \dots\dots$ | $60.000 - 100 = \dots\dots$ |
| $29.999 + 1.000 = \dots\dots$ | $60.000 - 1.000 = \dots\dots$ |
| $29.999 + 10.000 = \dots\dots$ | $60.000 - 10.000 = \dots\dots$ |