


Φτιάχνω γεωμετρικά σχήματα


Όνομα: _____

1. Αντιστοίχισε κάθε γεωμετρικό σχήμα με το αντίστοιχο στερεό και γράψε το όνομά τους

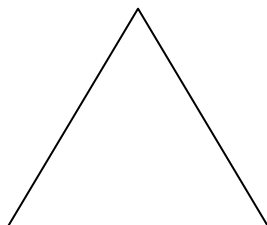
Γεωμετρικά σχήματα




.....



.....

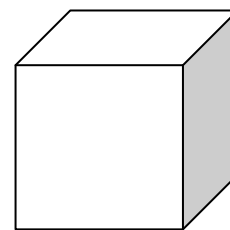


.....




.....


Γεωμετρικά στερεά



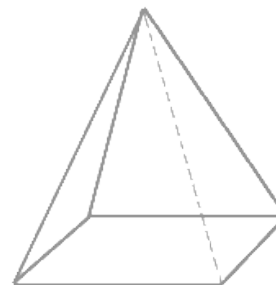
.....



.....



.....



.....