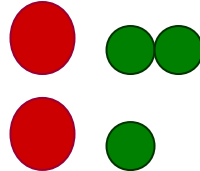
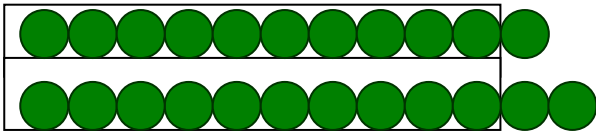




ΔΕΚΑΔΕΣ - ΜΟΝΑΔΕΣ

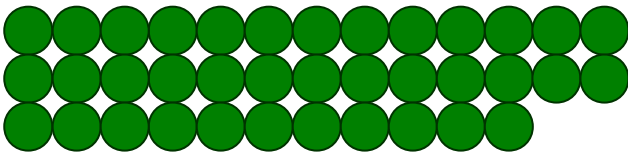
Έχουμε συμφωνήσει να ανταλλάζουμε 10 πράσινες κουκίδες με μία κόκκινη δηλαδή μία δεκάδα.



1. Δουλεύω όπως το παράδειγμα.


ΠΑΡΑΔΕΙΓΜΑ






		
2		3






		









2. Υπολογίζω πόσα είναι όπως στο παράδειγμα.

$$10 + 10 + 10 + 4 = 34$$

τριάντα τέσσερα

$$10 + 10 + 10 + 10 + 5 = \underline{\hspace{2cm}}$$

$$10 + 10 + 10 + 10 + 7 = \underline{\hspace{2cm}}$$

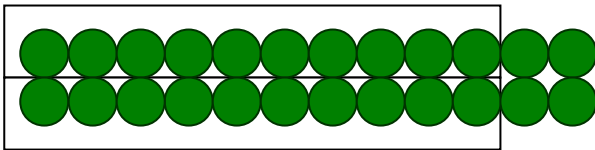
$$10 + 10 + 9 = \underline{\hspace{2cm}}$$

$$10 + 10 + 10 + 7 = \underline{\hspace{2cm}}$$


$$10 + 10 + 10 + 10 + 10 = \underline{\hspace{2cm}}$$

3. Δουλεύω όπως στο παράδειγμα. Με πράσινο χρώμα οι μονάδες και κόκκινο χρώμα οι δεκάδες.


ΠΑΡΑΔΕΙΓΜΑ




Δ	Μ
●	●
2	4



Δ	Μ
●	●



Δ	Μ
●	●



Δ	Μ
●	●