






→ Κυκλώνω τον σωστό αριθμό. Πόσα είναι;



7 10 8

6 5 9



5 4 3

10 7 9



Όνομα: _____

→ Κάνω την πρόσθεση και αντιστοιχίζω με το σωστό.

$0 + 1$

$2 + 2$

$5 + 2$

$3 + 2$

$8 + 1$



$6 + 2$

$0 + 0$

$2 + 1$

$4 + 2$

$1 + 1$

Όνομα: _____

Πρόσθεση

$$\begin{array}{r} 2 \\ +3 \\ \hline \\ \hline \end{array}$$

$$\begin{array}{r} 2 \\ +1 \\ \hline \\ \hline \end{array}$$

$$\begin{array}{r} 1 \\ +1 \\ \hline \\ \hline \end{array}$$

$$\begin{array}{r} 3 \\ +5 \\ \hline \\ \hline \end{array}$$

$$\begin{array}{r} 5 \\ +4 \\ \hline \\ \hline \end{array}$$

$$\begin{array}{r} 7 \\ +1 \\ \hline \\ \hline \end{array}$$

$$\begin{array}{r} 3 \\ +2 \\ \hline \\ \hline \end{array}$$

$$\begin{array}{r} 2 \\ +2 \\ \hline \\ \hline \end{array}$$

$$\begin{array}{r} 5 \\ +3 \\ \hline \\ \hline \end{array}$$

Όνομα: _____

Ε.Ε.Ε.ΕΚ. ΚΟΖΑΝΗΣ

ΜΑΘΗΜΑΤΙΚΑ



→ Κάνω κάθετα τις προσθέσεις.

Προσοχή! Έχουν κρατούμενο.

$$\begin{array}{r} \bigcirc \\ 28 \\ +23 \\ \hline \end{array}$$

$$\begin{array}{r} \bigcirc \\ 75 \\ +29 \\ \hline \end{array}$$

$$\begin{array}{r} \bigcirc \\ 29 \\ +56 \\ \hline \end{array}$$

$$\begin{array}{r} \bigcirc \\ 38 \\ +18 \\ \hline \end{array}$$

$$\begin{array}{r} \bigcirc \\ 83 \\ +63 \\ \hline \end{array}$$

$$\begin{array}{r} \bigcirc \\ 43 \\ +81 \\ \hline \end{array}$$

$$\begin{array}{r} \bigcirc \\ 63 \\ +41 \\ \hline \end{array}$$

$$\begin{array}{r} \bigcirc \\ 19 \\ +13 \\ \hline \end{array}$$

$$\begin{array}{r} \bigcirc \\ 28 \\ +49 \\ \hline \end{array}$$

$$\begin{array}{r} \bigcirc \\ 37 \\ +14 \\ \hline \end{array}$$

$$\begin{array}{r} \bigcirc \\ 85 \\ +15 \\ \hline \end{array}$$

$$\begin{array}{r} \bigcirc \\ 33 \\ +77 \\ \hline \end{array}$$

$$\begin{array}{r} \bigcirc \\ 94 \\ +70 \\ \hline \end{array}$$

$$\begin{array}{r} \bigcirc \\ 87 \\ +19 \\ \hline \end{array}$$

$$\begin{array}{r} \bigcirc \\ 74 \\ +29 \\ \hline \end{array}$$

$$\begin{array}{r} \bigcirc \\ 67 \\ +49 \\ \hline \end{array}$$

$$\begin{array}{r} \bigcirc \\ 48 \\ +44 \\ \hline \end{array}$$

$$\begin{array}{r} \bigcirc \\ 94 \\ +43 \\ \hline \end{array}$$

$$\begin{array}{r} \bigcirc \\ 16 \\ +68 \\ \hline \end{array}$$

$$\begin{array}{r} \bigcirc \\ 33 \\ +93 \\ \hline \end{array}$$

Όνομα: _____

Ε.Ε.Ε.ΕΚ. ΚΟΖΑΝΗΣ

ΜΑΘΗΜΑΤΙΚΑ

ΑΦΑΙΡΕΣΗ

Όνομα:

$3 - 1 = \underline{\quad}$



$7 - 5 = \underline{\quad}$




$2 - 1 = \underline{\quad}$



$4 - 3 = \underline{\quad}$



$6 - 4 = \underline{\quad}$



$5 - 2 = \underline{\quad}$





ΑΦΑΙΡΕΣΗ

$\text{3} - \text{2} = \square$

$4 - 1 = \square$

$6 - 2 = \square$

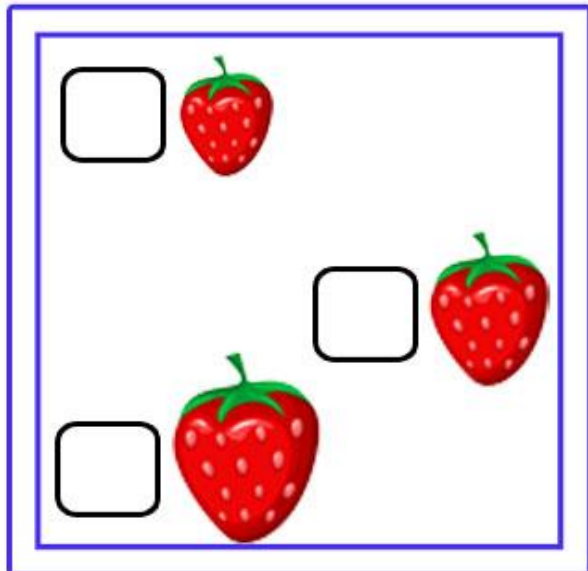
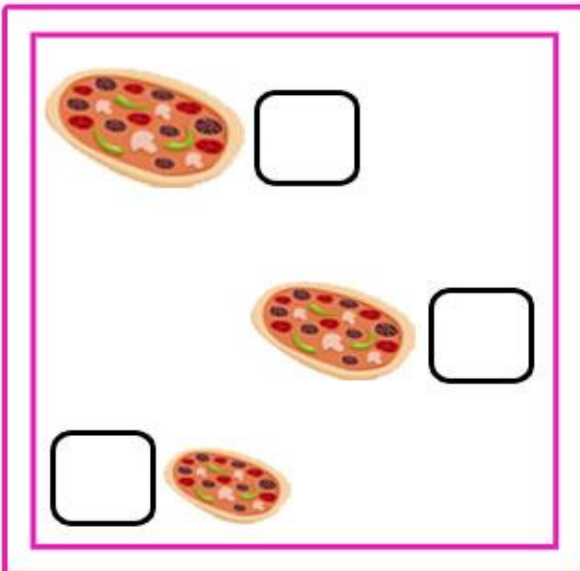
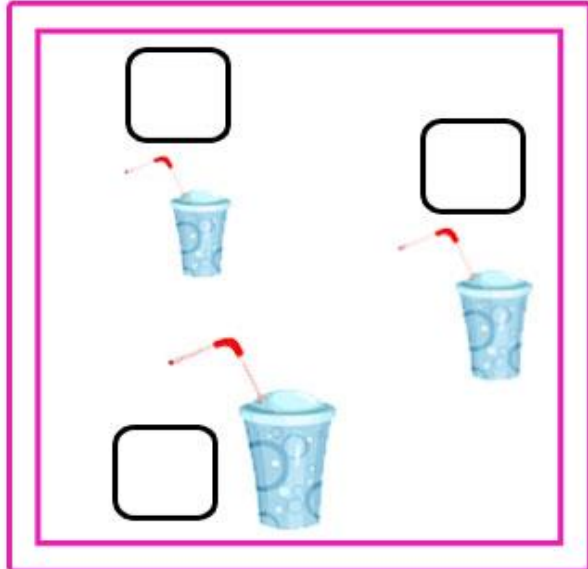
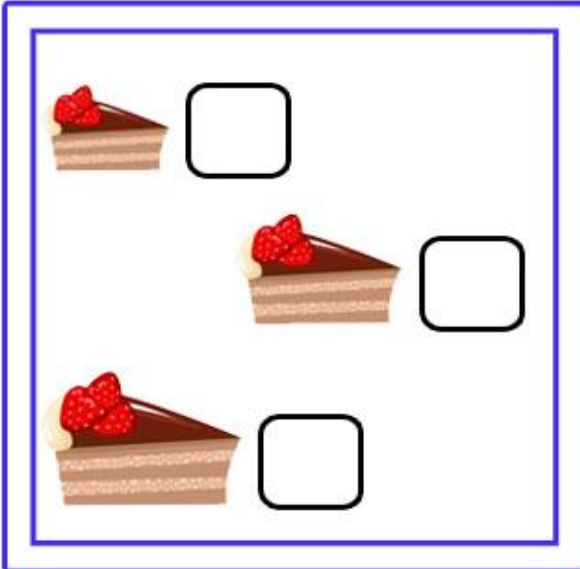
$4 - 2 = \square$

$5 - 2 = \square$

Όνομα: _____



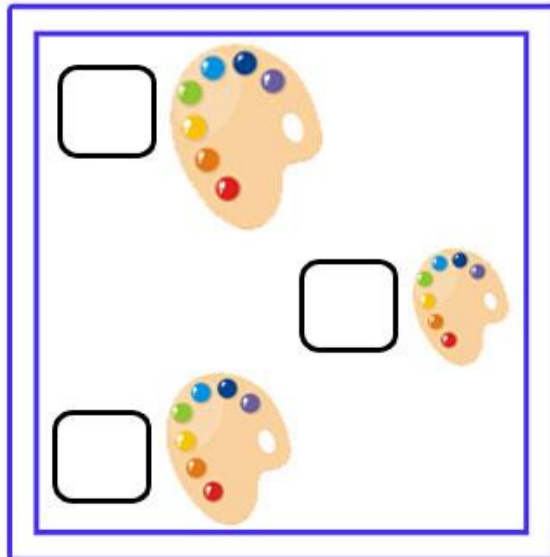
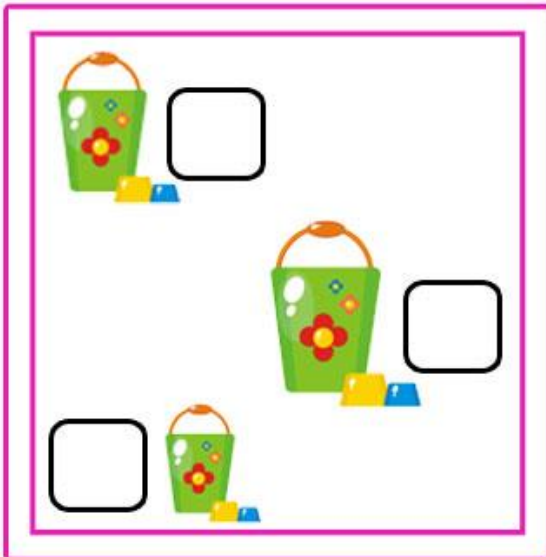
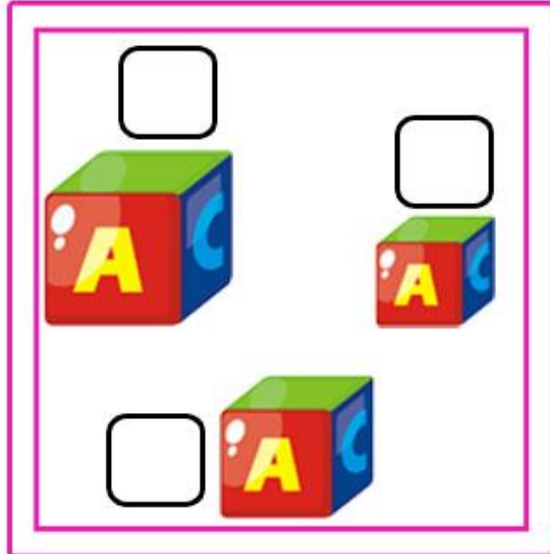
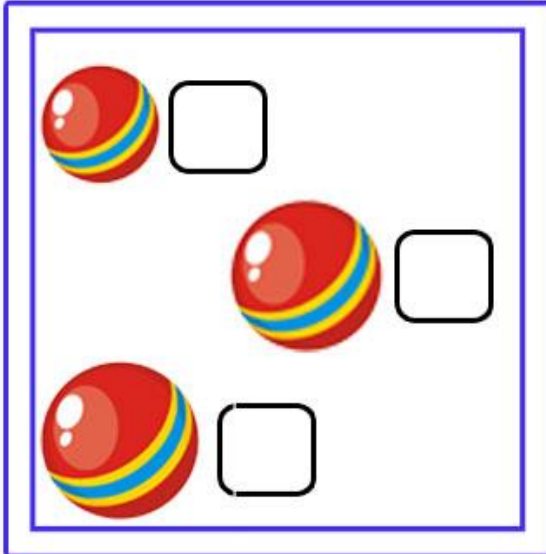
→ Σημείωσε με ένα Χ το πιο μικρό.



Όνομα: _____




→ Σημείωσε με ένα Χ το πιο μικρό.



Όνομα: _____

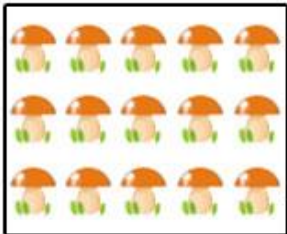


→ Κυκλώνω τον σωστό αριθμό. Πόσα είναι;



12 10 18

16 15 20



17 14 15

13 11 16



Όνομα: _____