

ΟΝΟΜΑ: _____

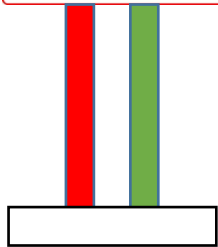
Μαθηματικά 5η Ενότητα

34. Μονάδες και δεκάδες (I) 1

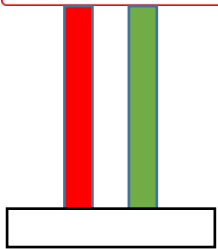
1. Φτιάχνω στον άβακα τον αριθμό που μου δείχνουν τα σκυλάκια.



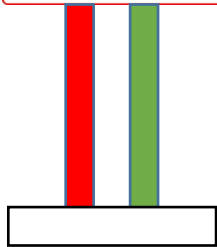
32



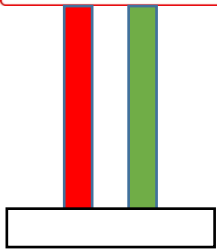
22



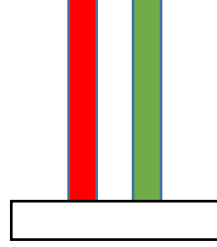
16



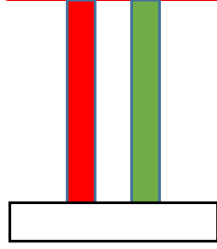
37



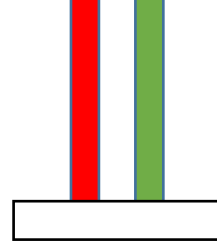
45



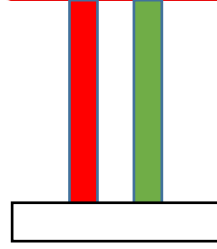
10



18



23



2. Κυκλώνω με κόκκινο τις δεκάδες και με πράσινο τις μονάδες.

19

48

52

24

32

50

46

15

